




**SESSION: 2022-2023**  
**CLASS-VII**

# **SUMMER VACATION PROJECT**



**Notes:-**

- \* *All the Holiday Homework Projects should be done neatly by the child with the assistance of parents.*
- \* *Holiday Homework is mandatory to be submitted on 1<sup>st</sup> July 2022 when school reopens.*
- \* *Holiday Homework should be done as per the instructions given.*
- \* *Holiday Homework will be evaluated in Subject Enrichment Activity which is of 10 marks and included in Mid Term Evaluation.*
- \* *Revision worksheet enclosed must be done and submitted along with the Holiday Homework.*

***HAPPY HOLIDAYS!!!***

## TOPIC-SDG GOAL No-8 with DECENT WORK AND ECONOMIC GROWTH

SUBJECT	TOPIC	TASK ASSIGNED
English	New job opportunities	Write a paragraph in about 100-120 words describing various new job opportunities for our young generation.
Hindi	बेरोजगारी	"भारत में बेरोजगारी कैसे दूर की जाए " इस विषय पर 250 - 300 शब्दों में अपने भाव स्पष्ट करते हुए एक लेख लिखिए।
Mathematics	Self employment	Make a graph under "Atmanirbhar" no of schemes and increase in employment and self employment.eg-Make in India and how is government promoting these scheme.
Science	Scientific Innovations	<ul style="list-style-type: none"><li>* COVAXIN- indigenous Covid-19 vaccine</li><li>* A.S.E.E.M- Atmanirbhar Skilled Employee Employer Mapping</li><li>* Indigenous Testing kit for Covid- 19</li><li>* DRONES – boosting agricultural yield</li></ul> Prepare a project file on anyone of the above mentioned topics, with following headings: 1. Topic name 2. Flow chart/diagram/model showing its construction or working 3. Important features 4. Who developed it 5. Purpose/ use
SST	Private companies	Imagine you are the owner of a company being the head prepare the various facilities you will provide to your employees for their development as well as growth of the company. (You can design a logo or assign a name to your company)
French	Sustainable Tourism	Make a collage of different ways to promote sustainable tourism for a greener future on A3 size sheet.
Sanskrit	विश्वविख्यात मनुष्य	"पांच ऐसे संस्कृत मुनिषियों के फोटो चिपकाइए जो संस्कृत भाषा के आधार पर विश्व विख्यात हुए और आप उनके कार्य से आप कितने प्रभावित हुए तथा उनसे सीख कर आपने अपना क्या उद्देश्य (AIM) बनाया ?" अपने शब्दों में लिखिए।
Computer	Career options	Make a presentation in MS PowerPoint on career options available for students after college and take a printout of the same.
G.K.	Raising Economy	Read the newspaper daily and cut the information / advertisements related to new job opportunities, career options, employment, unemployment, govt. measures to raise economy etc. and paste them in Scrap Book.



**SESSION: 2022-2023**

**CLASS: VII**

**SUBJECT: English**

**Revision Worksheet**

**Name:**

**Date:**

**Section A-Reading**

**Q1) Read the following passage carefully and answer the questions.**

Our ancestors had great difficulty in getting books. Now, our difficulty is what to read. There are books and books but our hours of reading are very few. Therefore, choice becomes essential. We should be very careful about what we read. There are books which poison our lives by suggesting evils. We should keep them at arm's length. We should read only those books which have stood the test of time. Such books are our great classics like the Ramayana and the Gita. They contain the wisdom of our sages and saints. They have appealed mankind from generation to generation. Reading of such books has ennobling influence on our mind and character. It gives us spiritual enjoyment. These books give us instruction with entertainment. They represent our ancient culture. They set before us high ideals to follow. They are our best friends, best guides and the best treasure.

**1. We should be selective because**

- (a) There is a great number of books available to us  
(b) There is scarcity of books  
(c) There are only bad books in the market  
(d) none of the above.

**Q2. We should avoid those books which**

- (a) Cost high price  
(b) come in paperback  
(c) Corrupt our lives by suggesting evils  
(d) come in more than one volume.

**Q3. The books which have stood the test of time are called....**

- (a) Great books  
(b) rare books  
(c) biographies  
(d) classics

**Q4. What is /are special quality/qualities of classics?**

- (a) They affect our mind in a good way  
(b) They teach us something great and also entertain us.  
(c) They help us in our spiritual growth  
(d) All the above.

**Q5. An expression in the passage which means 'good effect' is**

- (a) Spiritual enjoyment  
(b) Ennobling influence  
(c) high ideals  
(d) Very careful

## Section B-Writing & Grammar

**Q6. You are the Secretary, Cultural Club of your school. The school is celebrating its Annual Cultural Day on 24 July, 2022. Write a notice informing the badge holders and house captains of a meeting you are conducting to take decisions on important matters regarding the conduct of the programme. Do it in your English notebook.**

**Q7. Read the following sentences and mark whether Declarative, Interrogative, Imperative or Exclamatory.**

1. Do you drink five glasses of water daily? Ans \_\_\_\_\_
2. Birds are flying in the sky. Ans \_\_\_\_\_
3. Ah! What a lovely picture. Ans \_\_\_\_\_
4. Let us go for an outing. Ans \_\_\_\_\_
5. Let us go to the mall. Ans \_\_\_\_\_
6. The train is not arriving on time. Ans \_\_\_\_\_
7. Where has he gone? Ans \_\_\_\_\_
8. Call in my mother please. Ans \_\_\_\_\_
9. Kindly lend me your pen. Ans \_\_\_\_\_
10. I like this house. Ans \_\_\_\_\_

**Q8. Change the type of sentence as indicated in the bracket.**

1. It is a lovely dress. (Exclamatory)  
Ans \_\_\_\_\_
2. Bravo! We won. (Assertive)  
Ans \_\_\_\_\_
3. She did not go there. (Interrogative)  
Ans \_\_\_\_\_
4. Will you lend me your car? (Imperative)  
Ans \_\_\_\_\_
5. Show me your notebook. (Interrogative)  
Ans \_\_\_\_\_

**Q9. Read the following sentences and mark as Declarative, Interrogative, Imperative or Exclamatory.**

1. Are you happy?

Ans \_\_\_\_\_

2. They are dancing

Ans \_\_\_\_\_

3. May God bless him!

Ans \_\_\_\_\_

4. What a great building!

Ans \_\_\_\_\_

5. Do they keep cars?

Ans \_\_\_\_\_

**Q10. Identify the subject and the predicate in the following sentences.**

1. The moon was shining brightly.

Subject \_\_\_\_\_

Predicate \_\_\_\_\_

2. The boys were shouting loudly.

Subject \_\_\_\_\_

Predicate \_\_\_\_\_

3. The pretty girl was wearing a new frock.

Subject \_\_\_\_\_

Predicate \_\_\_\_\_

4. My younger sister serves in the army.

Subject \_\_\_\_\_

Predicate \_\_\_\_\_

5. The man and his wife were working in their garden.

Subject \_\_\_\_\_

Predicate \_\_\_\_\_

**Q11. Tick the appropriate adjective in the following.**

1. The (later/latter) part of the story is boring.
2. (Every/Each) person wants to be rich.
3. Don't leave the station till (farther/further) instructions.
4. She is my (older/elder) sister.
5. (All/whole) new channels want to cover weather report.
6. Have you read (any/some) new book recently.
7. I have (a little/little) time. I cannot visit them.
8. (a few/few) members were present, no decision could be made.
9. I have (some/any) good dresses for you.
10. The former is a writer, the (later/latter) a fighter.

**Section C -Literature**

**Q12) Answer the following questions in 30-40 words.**

- a. What is the role of Achrekar Sir in Sachin Tendulkar's life?

Ans

---

---

- b. Why was Sachin able to play better when Achrekar Sir watched him from a distance?

Ans

---

---

- c. What all things did Sachin learn after playing cricket?

Ans

---

---

- d. Describe the daily ritual of Sachin and his uniform.

Ans

---

---

e. How was Sachin benefitted after changing his school?

Ans

---

---

f. Write the summary of the poem “Be the Best of Whatever You Are”.

Ans

---

---

g. On what does a win or a loss not depend?

Ans

---

---

**Q13) Answer the following questions in 50-60 words.**

a. Do you think it is important to win all the time? How should one deal with failure?

Ans

---

---

---

---

---

---

b. What is the role of a great teacher in your life? What all qualities of your ideal teacher would you like to imbibe in your personality?

Ans

---

---

---

---

---

---



**SESSION: 2022-2023**  
**CLASS – VII**  
**SUBJECT:HINDI**  
**REVISION WORKSHEET**

**Name:**

**Date:**

**खंड अ (अपठित बोध)**

**प्रश्न 1. निम्नलिखित गद्यांश को ध्यानपूर्वक पढ़कर प्रश्नों के उत्तर लिखिए:-**

विद्यार्थी जीवन को मानव जीवन की रीढ़ की हड्डी कहें, तो कोई अतिशयोक्ति नहीं होगी। विद्यार्थी काल में बालक में जो संस्कार पड़ जाते हैं, जीवन भर वही संस्कार अमिट रहते हैं। इसीलिए यही काल आधारशिला कहा गया है। यदि यह नींव दृढ़ बन जाती है तो जीवन सुदृढ़ और सुखी बन जाता है। यदि इस काल में बालक कष्ट सहन कर लेता है तो उसका स्वास्थ्य सुंदर बनता है। यदि मन लगाकर अध्ययन कर लेता है तो उसे ज्ञान मिलता है, उसका मानसिक विकास होता है। जिस वृक्ष को प्रारंभ से सुंदर सिंचन और खाद मिल जाती है, वह पुष्पित एवं पल्लवित होकर संसार को सौरभ देने लगता है। इसी प्रकार विद्यार्थी काल में जो बालक श्रम, अनुशासन, समय एवं नियमन के साँचे में ढल जाता है, वह आदर्श विद्यार्थी बनकर सभ्य नागरिक बन जाता है। सभ्य नागरिक के लिए जिन-जिन गुणों की आवश्यकता है, उन गुणों के लिए विद्यार्थी काल ही तो सुंदर पाठशाला है। यहाँ पर अपने साथियों के बीच रहकर वे सभी गुण आ जाने आवश्यक हैं, जिनकी कि विद्यार्थी को अपने जीवन में आवश्यकता होती है।

प्रश्न: 1.जीवन की आधारशिला किस काल को कहा जाता है?

---

प्रश्न: 2.गद्यांश का शीर्षक है-जीवन का निर्माण काल विद्यार्थी जीवन।

---

प्रश्न: 3.मानव जीवन के लिए विद्यार्थी जीवन की महत्ता स्पष्ट कीजिए।

---

प्रश्न: 4.छोटे वृक्ष के पोषण का उल्लेख किस संदर्भ में किया गया है और क्यों?

---

प्रश्न: 5.विद्यार्थी जीवन की तुलना पाठशाला से क्यों की गई है?



## खंड ब (व्याकरण )

प्रश्न 2-निम्नलिखित शब्दों के तद्भव रूप लिखिए।

- 1.मातृ ----- 2.मुख ----- 3.अंगुष्ठ -----  
4.कोकिल ----- 5.उज्वल -----

प्रश्न 3- निम्नलिखित शब्दों में उचित स्थान पर अनुस्वार व अनुनासिक चिन्ह लगाइए।

- 1.आगन ----- 2.मदिर----- 3.पाच ----- 4.पखा-----

प्रश्न 4- वर्ण - विच्छेद कीजिए।

1. क्षत्रिय -----  
2. संवाद -----

प्रश्न 5- निम्नलिखित शब्दों लिंग परिवर्तित कीजिए।

- 1.आयुष्मान ----- 2.अभिनेता----- 3.मुगल-----  
4.मकड़ी ----- 5.मगरमच्छ-----

प्रश्न 6- निम्नलिखित प्रश्नों के उत्तर दीजिए -

क- भाषा का अर्थ बताते हुए इसके भेद बताइए।

-----  
-----  
-----

ख-नुक्ता से आप क्या समझते हैं ?

-----

ग-विसर्ग युक्त चार शब्द लिखिए।

-----

घ- रूढ़ शब्द किसे कहते हैं ?

-----  
-----

ङ- व्याकरण से आप क्या समझते हैं व इसके कितने अंग हैं?

-----

-----  
प्रश्न 7- निम्नलिखित शब्दों में से किन्हीं दो के विलोम लिखिए।

1.घटना----- 2.जीवित----- 3.खामोशी----- 4.विनाशक-----

प्रश्न 8- किन्हीं दो शब्दों के दो पर्यायवाची शब्द लिखिए।

1.अश्व ----- 2.रिश्ता ----- 3.अग्नि-----

### खंड - स (पाठ्य पुस्तक)

प्रश्न 9- अति लघु प्रश्न-

क- दादी माँ को कितने किस्म के दवाओं के नाम याद थे?

-----

ख- "हम पंखी उन्मुक्त गगन के " कविता के कवि का क्या नाम है?

-----

प्रश्न 10- लघु प्रश्न- किन्हीं तीन प्रश्नों के उत्तर लिखिए।

क- दादी माँ ने किशन भैया को क्या तोहफा दिया था?

-----

-----

ख- "हिमालय की बेटियाँ " पाठ में कौन-कौन सी नदियों का उल्लेख किया गया है।

-----

-----

ग - पक्षी आजाद होकर क्या-क्या करना चाहते हैं?

-----

-----

-----

प्रश्न 11- दीर्घ प्रश्न- किसी एक प्रश्न का उत्तर दीजिए ।

क- निम्नलिखित पंक्तियों का भाव स्पष्ट कीजिए - "लेकिन पंख दिए हैं तो आकुल उड़ान में भी गाना डालो। "

-----

-----

-----

-----

-----  
ग- हमारे जीवन में नदियों का क्या महत्व है?

-----  
-----  
-----

घ- हिमालय की यात्रा में लेखक को क्या-क्या अच्छा लगता है?

-----  
-----  
-----

### खंड द (रचनात्मक-कार्य)

प्रश्न 12- किसी एक विषय पर पत्र लिखिए।

क- विद्यालय छोड़ने का प्रमाण- पत्र प्राप्त करने के लिए प्रधानाचार्य को प्रार्थना पत्र लिखिए।

-----  
-----  
-----  
-----  
-----

-----  
-----  
-----  
-----  
-----  
-----  
-----  
-----  
-----  
-----

-----  
-----  
-----  
-----

ख -छोटे भाई को सफ़ाई का महत्त्व बताते हुए अपने आसपास साफ़-सुथरा रखने की प्रेरणा देते हुए पत्र लिखिए।

-----  
-----  
-----  
-----

-----  
-----  
-----  
-----  
-----  
-----  
-----  
-----  
-----  
-----  
-----  
-----  
-----  
-----  
-----  
-----  
-----  
-----  
-----  
-----  
-----

-----  
-----  
-----  
-----



**SESSION: 2022-2023**  
**CLASS: VII**  
**SUBJECT: MATHEMATICS**  
**Revision Worksheet**

**Name:**

**Date:**

**1. Fill in the blanks.**

- The additive inverse of  $(-5)$  is \_\_\_\_\_.
- \_\_\_\_\_ + 18 =  $(-13)$
- The division of a negative integer by a positive integer is a \_\_\_\_\_ integer.
- \_\_\_\_\_ is the multiplicative identity for integers.
- \_\_\_\_\_ operation is not closed.

**2. State whether the following statements are true or false.**

- 10 is the reciprocal of  $1/10$ .
- Subtraction of integers is not commutative.
- $(-1)7m = (-1)$ , where  $m$  is a natural number.
- Multiplication of integers is associative.
- The product of zero and an integer is always zero.

**3. Match the following.**

- |                                |              |
|--------------------------------|--------------|
| a. $89 + (-251) + (-64)$       | i. $(-66)$   |
| b. $(-5) \times (-7) \times 6$ | ii. $(-226)$ |
| c. $(-123) - (-57)$            | iii. 0       |
| d. $(-531) \div (-9)$          | iv. 210      |
| e. $0 \div (-59)$              | v. 59        |

**4. Solve the following.**

- $(-98) + (-67) + (-55)$

---

---

---

---

b.  $[(-45) - (-45)] \div (-45)$

---

---

---

---

c.  $(-1) \times [33 + (-79)]$

---

---

---

---

d.  $(-9) \times (-7) \times (-8)$

---

---

---

---

e.  $[168 - (-36)] \div [(-27) + 15]$

---

---

---

---

**5. Answer the following.**

a. The temperature of a city at 3.30 a.m. was  $-3^{\circ}\text{C}$ . After a few hours, at 11.30 a.m., the temperature was  $7^{\circ}\text{C}$ . What was the rise in the temperature of the city?

---

---

---

---

---

---

---

---

---

---

**b.** A test consisting of 10 questions was conducted. Every correct answer was awarded 2 marks and every incorrect answer was given  $(-2)$  marks. Eva attempted all questions but got 7 answers correct. What was her score?

---

---

---

---

---

---

**c.** A recreational diver is at 480 ft below the sea level. If he rises at a rate of 3 ft per minute, what is his position after 2 hours?

---

---

---

---

---

---

**d.** In a test,  $(+5)$  marks are given for every correct answer and  $(-2)$  marks are given for every incorrect answer. Vidya answered all the questions and scored 22 marks though she got 6 correct answers. How many incorrect answers did she attempt?

---

---

---

---

---

---

**e.** A bag contains ₹22,560. If it is divided equally among 5 friends, find the share of each friend.

---

---

---

---

---

---

## CONGRUENT TRIANGLES

### 1. State whether the following statements are true or false.

- a. Circles with the same area are congruent.
- b. A circle may be congruent to a triangle.
- c. A circle may be equal to a triangle.
- d. All equilateral triangles are congruent to each other.
- e. If two angles and a side of a triangle are equal to any two angles and a side of another triangle, the two triangles are congruent.
- f. If two sides and an angle of a triangle are equal to any two sides and an angle of another triangle, the two triangles are congruent.
- g. All congruent figures are equal.
- h. In congruent triangles the corresponding angles of two triangles are opposite to the equal sides of the two triangles.
- i. Sides of two triangles are congruent means the sides are equal.
- j. Two line segments of length 5cm are congruent.

### 2. Match the following for congruency of the given figures.

- |                              |                                  |
|------------------------------|----------------------------------|
| a. Two line segments         | i. Radii are equal.              |
| b. Two angles                | ii. Lengths of the sides is same |
| c. Two equilateral triangles | iii. Measure the same in degrees |
| d. Two circles               | iv. Have the same length         |
| e. Two rectangles            | v. Length and breadth are same   |





c. Construct an equilateral triangle with side 6 cm.

d. Construct an isosceles triangle with equal sides measuring 8 cm each and the angle between them as  $40^\circ$ .

e. Can a triangle have side lengths 3, 7, and 9? Why or why not? Show your work.



Session- 2022-2023

Revision Worksheet

Subject: Science

Class: VII

Topic: Nutrition in Plants, Motion and Time & Heat

NAME-----

DATE-----

**A. Choose the correct option**

1. Amaranth is an example of

- a. Parasite      b. Host      c. Autotrophs      d. Saprotrophs

b.

2. The product of photosynthesis is-

- a. Carbohydrate      b. Protein      c. Fats      d. All of these

3. The basic unit of speed is-

- a. Km/ min      c. m/ min  
b. Km/ sec      d. m/ sec

4. One litre of water at 30°C is mixed with one litre of water at 48°C, the temperature of the mixture will be-

- a. 48°C      c. Between 30°C and 48°C  
b. 30°C      d. More than 48°C

5. A wooden spoon is dipped in a cup of ice-cream, its other end-

- a. Becomes cold by the process of convection  
b. Becomes hot by the process of conduction  
c. Does not become cold  
d. None of these.

**B. Fill in the blanks:-**

1. The nucleus in a cell is surrounded by a jelly like substance called\_\_\_\_\_.

2. Lichen is a symbiotic association between\_\_\_\_\_and\_\_\_\_\_.

3. During photosynthesis solar energy is converted into\_\_\_\_\_.

4. If the speed of an object keeps changing in equal interval of time, while moving along a straight line, its motion is said to be\_\_\_\_\_.

5. One complete to and fro motion of a pendulum from rest position is called one\_\_\_\_\_.

6. Insulators are \_\_\_\_\_ conductor of heat while conductors are \_\_\_\_\_ conductor of heat.
7. All hot bodies \_\_\_\_\_ heat.
8. Temperature of boiling water cannot be measured by a \_\_\_\_\_.
9. Land breeze blows at the time of \_\_\_\_\_ and sea breeze blows at the time of \_\_\_\_\_.

**C. Answer the following Questions:-**

1. What do you mean by the statement; “car is moving with the speed of 50 Km per hour”?

---

---

2. An iron rod at 30°C is dropped by chance into a bucket containing water at 30°C, the heat will flow or not in this case? Why?

---

---

3. What is the use of the maximum – minimum thermometer?

---

---

4. How do plants obtain raw materials from the surrounding (soil & atmosphere)? Explain with the help of a diagram

---

---

---

---

---

5. Define photosynthesis along with the equation for the same. In which part of the plant it majorly takes place?

---

---

---

---

---

6. How would you test the presence of starch in leaves?

---

---

---

---

7. Sumit covers a distance of 2.4 Km from his house to reach her college on a scooter. If the scooter has a speed of 6m/sec, calculate the time taken by her to reach the college.

---

---

---

---

8. The odometer of a car reads 57321.0 km when the clock shows the time 08:30 AM. What is the distance moved by the car, if at 08:50 AM, the odometer reading has changed to 57336.0 km? Calculate the speed of the car in km/min during this time. Express the speed in km/h also.

---

---

---

---

9. Plot a single graph for two vehicles A and B, where CarA is moving faster than CarB.



10. How nutrients are replenished in soil? Give atleast 3 ways

---

---

---

---

11. Explain how Pitcher plants get their nutrition?

---


---

---

---

12. Show the shape of the distance-time graph for the motion in the following cases

- a. A car is moving with a constant speed      b. A car parked at some distance from your home.  
c. car moving with non-uniform speed



13. Explain how water heated by convection?

---

---

---

---

14. In summer we prefer light-coloured clothes and in winter we usually wear dark-coloured clothes. Explain Why?

---

---

---

---

15. Why one thick blanket is less warm than two thin blankets joined together?

---

---

---

---

16. State 2 similarities and 2 differences between the laboratory thermometer and the clinical thermometer.

---

---

---

---


---

---

---

17. Differentiate between land breeze and sea breeze with the help of a diagram.


18. Plot graph for following odometer reading

<b>Time (AM)</b>	<b>Odometer reading</b>	<b>Distance from the starting point</b>
8:00 AM	36540 km	
8:30 AM	36560 km	
9:00 AM	36580 km	
9:30 AM	36600 km	
10:00 AM	36620 km	



**SESSION: 2022-2023**  
**CLASS – VII**  
**SUBJECT: SST**  
**REVISION WORKSHEET**

**Name: -**

**Section-**

**I. Multiple Choice Questions**

1. When is the World Environment Day celebrated every year?  
a) 25th December                      b) 23rd June                      c) 26th January                      d) 5th June
2. In which period did the number and variety of textual records increase dramatically?  
a) 600 to 700                      b) 700 to 800                      c) 800 to 1000                      d) 700 to 1750
3. What was the use of money collected from taxes?  
a) To finance the kings' establishment                      b) Construction of temples and forts  
c) To fight wars                      d) All of these
4. Whose autobiography is 'Joothan'?  
a) Omprakash Valmiki's                      b) Atal Bihari Vajpayee's                      c) Mahatma Gandhi's  
d) Pt. Jawaharlal Nehru's
5. How much percentage of all communicable diseases are water borne?  
a) 11%                      b) 21%                      c) 31%                      d) 50%

**II.Short- answer type questions.**

1. ' All living beings are dependent on each other and non living things' Explain in brief.

Answer \_\_\_\_\_

---

---

---

---

---



2. 'Raziyya Sultan was capable and wise than her brothers still not allowed to rule over Delhi'. Explain

Answer \_\_\_\_\_

---

---

---

---

---

---

3. Discuss about the expansion of Delhi Sultanate?

Answer \_\_\_\_\_

---

---

---

---

---

---

4. 'Private health care hospitals are good at providing medical facilities as compared to government hospitals'. How?

Answer \_\_\_\_\_

---

---

---

---

---

---

5. How does Indian constitution makes sure that all are equal as a citizen of a country?

Answer \_\_\_\_\_

---

---

---

---

---

---

### III. Long- answer type questions.

1. 'Life of ordinary men and women was not so important' Why do you think it was not recorded by Twarikh?

Answer \_\_\_\_\_

\_\_\_\_\_

\_\_\_\_\_

\_\_\_\_\_

\_\_\_\_\_

2. How the term "Hindustan" was used in different times?

Answer \_\_\_\_\_

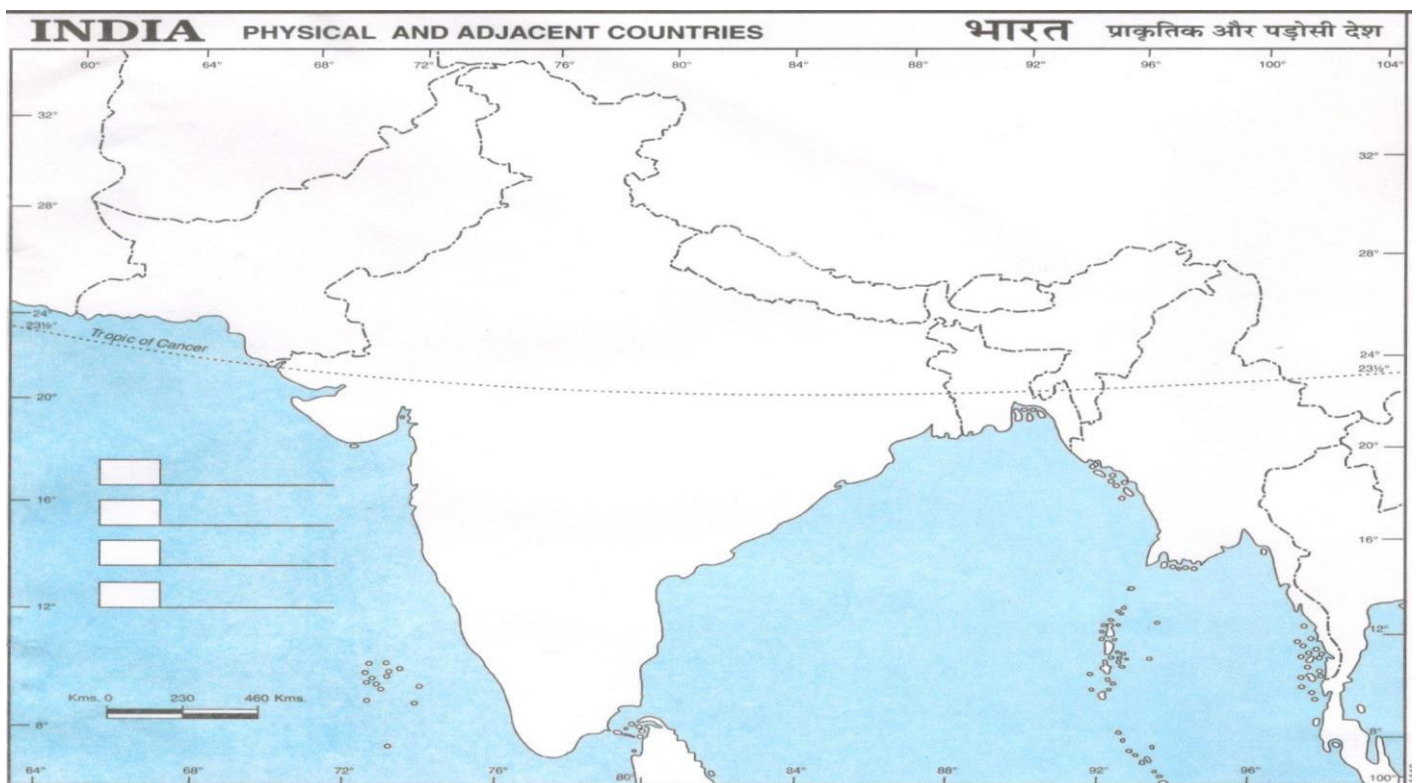
\_\_\_\_\_

\_\_\_\_\_

\_\_\_\_\_

### IV. Map-Work

1. On physical map of India mark the selected cities of Delhi in the 13<sup>th</sup>-14<sup>th</sup> centuries.





**SESSION: 2022-2023**  
**CLASS: VII**  
**SUBJECT: COMPUTER**  
**REVISION WORKSHEET**

**Name:**

**Date:**

**1. Name the following functions**

1. Returns text in lowercase
2. Returns text in uppercase
3. Returns maximum value out of the argument
4. Returns minimum value out of the argument
5. Returns the square root of the number

**2. Give the full form of**

1. SEM
2. CAD
3. IoT
4. GPS
5. SMM

**3. Answer in one word**

1. The function which returns the remainder after dividing two numbers
2. The function which joins multiple text strings into one.
3. Syntax of a function
4. The country where the internet speed is the fastest.
5. One example of human argumentation

4. What is goal seek?

---

---

---

---

---

---

---

5. What do you understand by statistical functions?

---

---

---

---

---

---

---

6. Explain the types of functions used in Ms Excel.

---

---

---

---

---

---

---

---

7. Write down the various models of digital marketing.

---

---

---

---

---

---

---

---

---

---

---

---

8. Explain the concept behind Autonomous car.

---

---

---

---

---

---

---

---

---

---

---

---



SESSION :2022-2023  
REVISION WORKSHEET  
SUBJECT : SANSKRIT  
CLASS : VII

NAME:

DATE:

प्रश्न 1. शब्द रूप लिखिए –

१. 'राम' अकारांत पुल्लिंग

विभक्ति	एकवचन	द्विवचन	बहुवचन
प्रथमा	-----	-----	-----
द्वितीया	-----	-----	-----
-			
तृतीया	-----	-----	-----
चतुर्थी	-----	-----	-----
पंचमी	-----	-----	-----
षष्ठी	-----	-----	-----
सप्तमी	-----	-----	-----
संबोधन	-----	-----	-----

२. 'लता' आकारान्त स्त्रीलिंग

विभक्ति	एकवचन	द्विवचन	बहुवचन
प्रथमा	-----	-----	-----
द्वितीया	-----	-----	-----
-			
तृतीया	-----	-----	-----
चतुर्थी	-----	-----	-----
पंचमी	-----	-----	-----
षष्ठी	-----	-----	-----
सप्तमी	-----	-----	-----
संबोधन	-----	-----	-----

३. 'फल' अकारांत नपुंसकलिंग

विभक्ति	एकवचन	द्विवचन	बहुवचन
प्रथमा	-----	-----	-----
द्वितीया	-----	-----	-----
-			
तृतीया	-----	-----	-----
चतुर्थी	-----	-----	-----
पंचमी	-----	-----	-----
षष्ठी	-----	-----	-----
सप्तमी	-----	-----	-----
संबोधन	-----	-----	-----

४. 'बालक' अकारान्त पुल्लिंग

विभक्ति	एकवचन	द्विवचन	बहुवचन
प्रथमा	-----	-----	-----
द्वितीया	-----	-----	-----
-			
तृतीया	-----	-----	-----
चतुर्थी	-----	-----	-----
पंचमी	-----	-----	-----
षष्ठी	-----	-----	-----
सप्तमी	-----	-----	-----
संबोधन	-----	-----	-----

प्रश्न -2. कारक एवं कारक विभक्तियों की सारणी बनाइए –

विभक्ति	कारक	कारक-चिह्न ( परसर्ग )	राम के रूप एकवचन में
प्रथमा	कर्ता	ने	रामः
द्वितीया			
तृतीया			
चतुर्थी			
पंचमी			
षष्ठी			
सप्तमी			
संबोधन			

प्रश्न -3. कोष्ठकात् उचितधातुरूपं चित्वा रिक्तस्थानानि पूरयन्तु -

(कोष्ठक से उचित धातु रूप चुनकर रिक्त स्थानों को पूरा कीजिए)

- (i) ताः पुस्तकम् -----| (पठति , पठतः , पठन्ति )
- (ii) सः भोजनम् -----| (खादति , खादतः , खादन्ति )
- (iii) अहम् विद्यालयम् -----| (गच्छामि , गच्छावः , गच्छामः)
- (iv) अश्वौ -----| (धावति , धावतः , धावन्ति )

प्रश्न 4 -. संस्कृत वर्कबुक में से पेज नंबर 36, 37 , 38, 39,40, 41 कीजिए।



**SESSION: 2022-2023**  
**CLASS: VII**  
**SUBJECT: FRENCH**  
**REVISION WORKSHEET**

NAME-

DATE -

**CULTURE ET CIVILISATION**

**Q1. Répondez -**

- Qui est l'autorité suprême de la nation?
- Quel est l'emblème national de la France?

**Q2. Nommez -**

- Deux montagnes \_\_\_\_\_ , \_\_\_\_\_
- Deux aéroports \_\_\_\_\_ , \_\_\_\_\_

**Q3. Liez les colonnes A et B -**

**A**

- Victor Hugo
- La Manche
- Le coq
- Lyon
- La fête nationale
- La Marseillaise

**B**

- ville
- L'hymne national
- Bastille
- Français célèbre
- Un émeraude
- Gallus

**Q4. Nommez-**



a. \_\_\_\_\_



b. \_\_\_\_\_



c. \_\_\_\_\_



d. \_\_\_\_\_

**Grammaire**

**Q1. Mettez au négatif :**

- a. J'attrape un poisson à la pêche.
- b. Vous avez une cravate?
- c. Il y a beaucoup de singes dans le zoo.
- d. C'est le cours d'histoire.

**Q2. Conjuguez les verbes :**

- a. Tu \_\_\_\_\_ (aller) au cinéma.
- b. Vous \_\_\_\_\_ (regarder) la télévision.
- c. Manuel \_\_\_\_\_ (marcher) dans le jardin.
- d. Elles \_\_\_\_\_ (être) italiennes.
- e. Nous \_\_\_\_\_ (finir) les devoirs.



**Q3. Conjuguez les verbes :**

**VouloirPouvoir**

Je		Je	
Tu		Tu	
Ils/Elle		Il/Elle	
Nous		Nous	
Vous		Vous	
Ils/Elles		Ils/Elles	

**Q4. Complétez avec l'adverbe de quantité.**

- a. \_\_\_\_\_ stylosachetez-vous?
- b.Sylvien' aime pas les bonbons.Elle mange \_\_\_\_\_ bonbons que son amie.
- c. Je regarde \_\_\_\_\_ les oiseaux sur l'arbre.
- d. Il n' aime pas la baguette. Il mange \_\_\_\_\_ baguette.
- e. Caroline prend \_\_\_\_\_ viande.

**Q5. Mettez le dialogue enordre.**

Salut! J' aime le S.V.T,est-cequetuveuxvenirdanscetteclasse? \_\_\_\_\_

Au revoir! \_\_\_\_\_

Non, je ne veux pas étudier le S.V.T maintenant. \_\_\_\_\_

Salut! Quelest ton sujetfavori? \_\_\_\_\_

D'accord , au revoir! \_\_\_\_\_

**Q6. Regardez l'image et écrivez les choses quevousvoyezdanscette image.**

